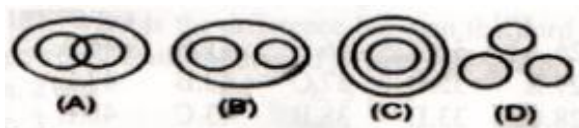


Rashtriya Military Schools Common Entrance Test – 2015 Class – VI

General Intelligence (Reasoning)

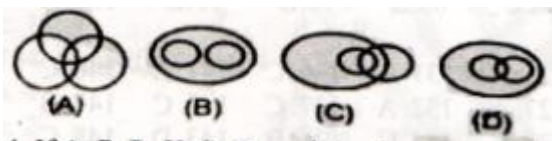
1- Which of the following diagrams indicates the best relation between House, Kitchen, Bedroom:



2 – In a certain code “SMART” is written as “TRAMS” and “BIT” as “TIB”. How would “WRONG” be written in that code :

- (a) NGPWR (b) GNPWR
(c) GNORW (d) GNPRW

3 – In which of the following indicates the best relation between Players, Human beings, Students :



4 – If A, P, R, X, S, Z are sitting in a row. S and Z are in the centre. A and P are at the end. R is sitting to the left of A. Who is to the right of P :

- (a) A (b) X (c) S (d) Z

5 – In a certain code BECAUSE is written BFCBVSF. How would DOORSEP be written in that code :

- (a) DPPRSTFP (b) DOROPEST
(c) PERSRDOO (d) ROODPEST

6 – Which one will replace the question mark :

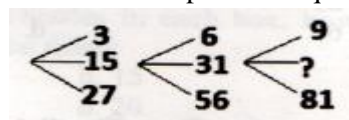
A ₂	C ₄	E ₆
G ₃	I ₅	?
M ₅	O ₉	Q ₁₄

- (a) L₁₀ (b) I₁₅ (c) K₁₅ (d) K₈

7 – Sachin walks 20 km towards North. He turns left and walks 40 km. He again turns left and walks 20 km. Finally, he moves 20 km after turning to the left. How far is he from his starting position :

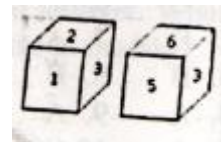
- (a) 20 Km (b) 30 Km (c) 50 Km (d) 60 Km

8 – Which one will replace the question mark :



- (a) 45 (b) 41 (c) 32 (d) 40

9 – Which digit will appear on the face with the number 4 :

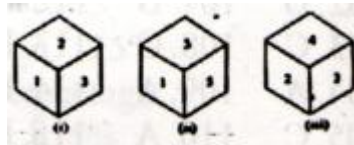


- (a) 3 (b) 5 (c) 6 (d) $\frac{2}{3}$

10 – The number of boys in a class is three times the number of girls. Which one of the following numbers cannot represent the total number of children in the class ?

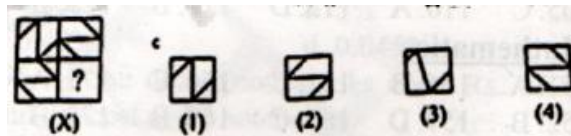
- (a) 48 (b) 44 (c) 42 (d) 40

11 – What should be the number opposite to 3 ?

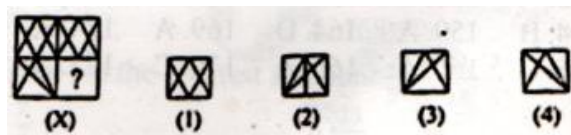


- (a) 1 (b) 6 (c) 5 (d) 4

12 –

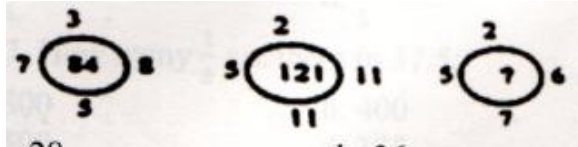


13 –



Rashtriya Military Schools Common Entrance Test – 2015 Class – VI

14 –



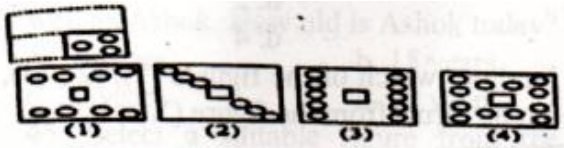
- (a) 28 (b) 36 (c) 48 (d) 42

15 – Arrange the following word as per order in the dictionary :

- (i) QUIET (ii) QUITE (iii) QUIT
(iv) QUEST (v) QUIL

- (a) iv, i, v, ii, iii (b) iv, i, v, iii, ii
(c) iv, v, i, ii, iii (d) iv, v, i, iii, ii


16 –



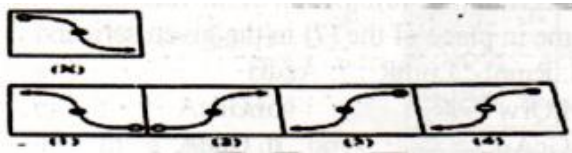
17 – According to a code if “Business are exporting diamonds” is 1, 2, 3, 4, “they are in demand” is 4, 5, 6, 7 “demand dollars for diamonds” is 1, 5, 8, 9 and “Businessmen pay in dollars” is 2, 6, 9, 10. What is code for pay:

- (a) 10 (b) 9
(c) 5 (d) 6

18 –



19 –



20 – A cyclist goes straight 7 kms eastwards, then turns right and goes straight 3 kms and goes right again and goes straight 10 kms. In which direction is he from the starting point :

- (a) South – West (b) North – East

- (c) North – West (d) South – East

21 – Roshan is taller than Hardik who is shorter than Sushil. Niza is taller than Harry but shorter than Hardik. Sushil is shorter than Roshan. Who is the tallest.

- (a) Roshan (b) Sushil
(c) Hardik (d) Harry

22 – Priti scored more than Rahul. Yamuna scored as much as Divya. Lokita scored less than manju. Rahul scored more than Yamuna. Manju scored less than Divya. Who scored the least :

- (a) Manju (b) Yamuna
(c) Lokita (d) Rahul

23 – Arrange the given dates of birth in descending order :

- (i) 15.04.1950 (ii) 14.05.1960 (iii) 14.06.1960
(iv) 20.04.1950 (v) 25.05.1960
(a) i, v, ii, iii, iv (b) i, iv, ii, v, iii
(c) i, iii, ii, iv, v (d) i, ii, iv, v, iii

24 – In a code language if POSE is coded as OQNPRTDF, then the word TYPE will be coded as :

- (a) SUXZOQFD (b) SUXZQOFD
(c) SUXZOQDF (d) SUXZQODE

Direction (25 – 27) : In the following in the correct sequence of occurrence of event :

- 25 – 1. Key 2. Door 3. Lock
4. Room 5. Switch on

- (a) 5, 1, 2, 4, 3 (b) 4, 2, 1, 5, 3
(c) 1, 2, 3, 5, 4 (d) 1, 3, 2, 4, 5

- 26 – 1. Study 2. Job 3. Examination
4. Earn 5. Apply

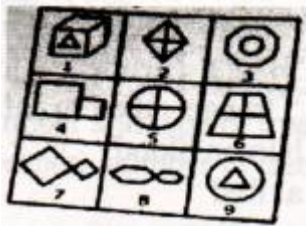
- (a) 1, 2, 3, 4, 5 (b) 1, 5, 3, 2, 4
(c) 1, 3, 5, 4, 2 (d) 1, 3, 5, 2, 4

- 27 – 1. Rainbow 2. Rain 3. Sun
4. Happy 5. Child

- (a) 2, 1, 4, 3, 5 (b) 2, 3, 1, 5, 4
(c) 4, 2, 3, 5, 1 (d) 4, 5, 1, 2, 3

Rashtriya Military Schools Common Entrance Test – 2015 Class – VI

28 – Group the given figures into three classes using each figure only once :



- (a) 1, 3, 9 : 2, 5, 6 : 4, 7, 8
 (b) 1, 3, 9 : 2, 7, 8 : 4, 5, 6
 (c) 1, 2, 4 : 3, 5, 7 : 6, 8, 9
 (d) 1, 3, 6 : 2, 4, 8 : 5, 7, 9

29 – A, B, C, D and E are five schools facing towards North. A is in the middle of E and B to the right of D. If C and D are at two ends, which school is on the left side of C :

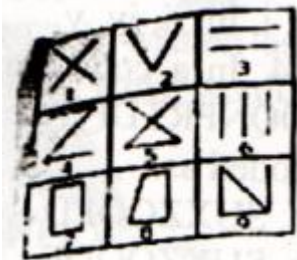
- (a) E (b) D (c) A (d) B

30 – Group the given figures into three classes using each figures only once :



- (a) 1, 5, 7 : 2, 4, 6 : 3, 9, 8
 (b) 1, 3, 9 : 2, 7, 8 : 4, 5, 6
 (c) 1, 5, 7 : 2, 4, 8 : 3, 6, 9
 (d) 1, 7, 9 : 3, 5, 8 : 2, 4, 6

31 – Group the given figures into three classes using each figure only once :



- (a) 1, 2, 3 : 4, 5, 6 : 7, 8, 9

- (b) 1, 3, 5 : 2, 4, 6 : 7, 8, 9
 (c) 1, 5, 9 : 3, 6, 2 : 4, 7, 8
 (d) 1, 9, 7 : 2, 8, 5 : 3, 4, 6

32 – How many such 7 are there in the following arrangement, each of which is immediately preceded by 1 and immediately succeeded by 3 :
 8 3 2 7 1 5 3 7 4 6 1 7 3 7 1 6 7 4 2 1 7 3 5 3 7 1 8.

- (a) 1 (b) 2 (c) 3 (d) More than 3

33 – Find out which of the figure (1), (2), (3), (4) can be forms from the figure (X).

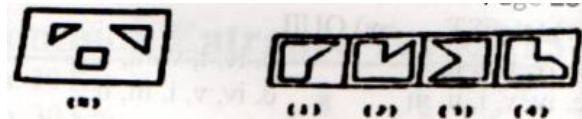


- (a) 1 (b) 2 (c) 3 (d) 4

34 – If 'White' is called 'Blue', 'Blue' is called 'Red', 'Red' is called 'Yellow', 'Yellow' is called 'Green', 'Green' is called 'Black' is called 'Violet' and 'Violet' is called 'Orange' then what would be the color of human blood

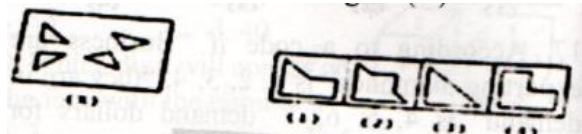
- (a) Red (b) Yellow (c) Green (d) Violet

35 – Find out which of the figures (1), (2), (3), (4) can be forms from the figure (X).



- (a) 1 (b) 2 (c) 3 (d) 4

36 – Find out which of the figures (1), (2), (3), (4) can be forms from the figure (X).



- (a) 1 (b) 2 (c) 3 (d) 4

37 – Find out which of the figures (1), (2), (3), (4) can be forms from the figure (X).

Rashtriya Military Schools Common Entrance Test – 2015 Class – VI



- (a) 1 (b) 2 (c) 3 (d) 4

Direction (38 – 40) : Which of the following will come in place of the (?) in the given series :

38 – RmpL : LpmR :: ? : AcdG

- (a) PQrw (b) GdcA (c) GcAd (d) GcdA

39 – 4 : 9 :: ? : 25

- (a) 16 (b) 18 (c) 20 (d) 14

40 – 5, 13, ?, 109, 325, 973

- (a) 39 (b) 36 (c) 37 (d) 35

41 – Find the letters/ words which are different from the group :

- (a) Yen (b) Lira (c) Dollar (d) Ounce

42 – Boat : Oar :: Bicycle : ?

- (a) Road (b) Wheel (c) Seat (d) Paddle

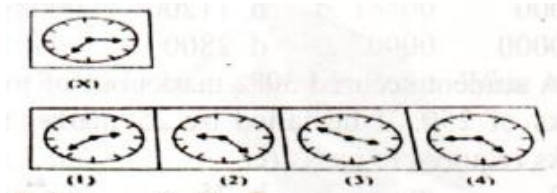
43 – The day before yesterday was Saturday so tomorrow it will be :

- (a) Friday (b) Monday
(c) Tuesday (d) Wednesday

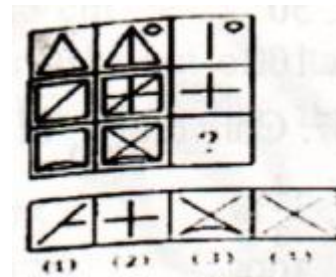
44 – Ashok's mother was 3 times as old Ashok 5 years ago. After 5 years she will be twice well as Ashok. How old is Ashok today ?

- (a) 10 years (b) 15 years
(c) 25 years (d) 20 years

45 – Select a suitable figure from the four alternatives.




46 – Select a suitable figure from the four alternatives that would complete the figure :



- (a) 1 (b) 2 (c) 3 (d) 4

47 – Select a suitable figure from the four alternatives that would complete the figure :

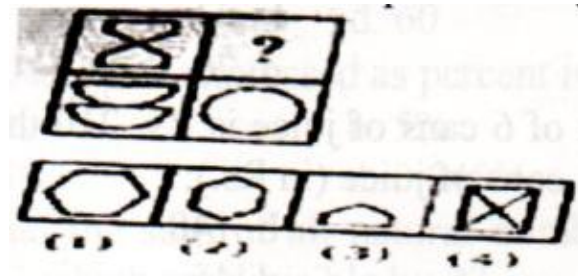


- (a) 1 (b) 2 (c) 3 (d) 4

48 – In a row of boys, Srinath is 7th from the left and Venkant is 12th from the right. If they interchange their positions. Srinath becomes 22nd from the left. How many boys are there in the row ?

- (a) 19 (b) 31 (c) 33 (d) 34

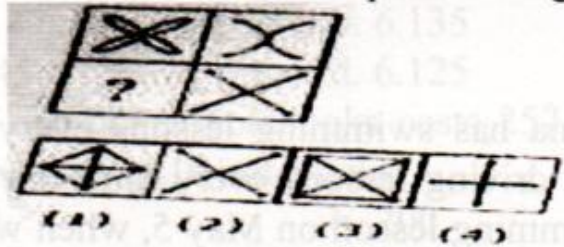
49 – Select a suitable figure from the four alternatives that would complete the figure:



- (a) 1 (b) 2 (c) 3 (d) 4

Rashtriya Military Schools Common Entrance Test – 2015 Class – VI

50 – Select a suitable figure from the four alternatives that would complete the figure:



- (a) 1 (b) 2 (c) 3 (d) 4

Mathematics

51 – There are 789 pages in a book. How many pages are there in 14 books?

- (a) 11056 (b) 11046 (c) 11036 (d) 11066

52 – How many weeks are there in 105 days :

- (a) 14 (b) 12 (c) 13 (d) 15

53 – There are 4410 toffees in a box. Each student of the school is provided with 14 toffees. How many students are there in the school ?

- (a) 305 (b) 315 (c) 325 (d) 335

54 – Round 550666 to the nearest hundred :

- (a) 550700 (b) 550600
(c) 550000 (d) 551000

55 – You have finished 122 question out of 156. How many more questions do you have to work on to finish:

- (a) 32 (b) 33 (c) 34 (d) 35

56 – I am planting 50 apple trees and 30 peach trees. I want the same number and type of trees per row. What is the maximum number of trees I can plant per row ?

- (a) 5 (b) 10 (c) 12 (d) 7

57 – Sharda has two pieces of cloth. One piece is 72 inches wide and the other piece is 90 inches wide. She wants to cut both pieces into strips of equal width that are as wide as possible. How wide should she cut the strips :

- (a) 18 (b) 16 (c) 14 (d) 12

58 – Leena has swimming lessons every fifth day and driving lessons every third day. She had swimming lesson on May 5, when will be the next date on which has both swimming and driving lessons :

- (a) 15 May (b) 10 May (c) 20 May (d) 5 May

59 – Find the value of the expression in lowest forms : $\frac{1}{5} \div \frac{2}{3}$:

- (a) $\frac{2}{15}$ (b) $\frac{3}{10}$
(c) $\frac{1}{5}$ (d) $\frac{3}{15}$

60 – What will be the interest for 1000 rupees for 2 years at 8 % per annum :

- (a) Rs. 120 (b) Rs. 160
(c) Rs. 140 (d) Rs. 100

61 – Calculate the ratios $2 : 3 = 36 : \dots$

- (a) 45 (b) 54 (c) 37 (d) 56

62 – Mahesh can complete a work in 20 days and the same work Suresh can complete in 5 days. In how many days will they jointly complete the work :

- (a) 4 (b) 8 (c) 6 (d) 5

63 – A man bought a watch for Rs. 550. At what price should he sell the watch so as to gain 10 % annum.

- (a) Rs. 560 (b) Rs. 600
(c) Rs. 605 (d) Rs. 575

64 – A person has purchased $\frac{3}{4}$ of a kg salt from one shop and $\frac{1}{2}$ kg from another shop. Out of total purchase he has used $\frac{2}{3}$ kg. Find how much salt is left with him :

- (a) $\frac{1}{3}$ kg (b) $\frac{7}{12}$ kg (c) $\frac{2}{3}$ kg (d) $\frac{5}{12}$ kg

65 – How many 20 cm long 14 cm wide bricks are needed to pave a rectangular floor 16 m long and 14 m wide :

Rashtriya Military Schools Common Entrance Test – 2015 Class – VI

- (a) 8000 (b) 11200
(c) 10000 (d) 2800
- 66 – A student secured 30 % marks out of total marks of 250. If he failed by 25 marks, the marks required to pass are :
- (a) 50 (b) 75
(c) 100 (d) 125
- 67 – Convert $\frac{11}{300}$ in to percentage :
- (a) $3\frac{2}{3}$ % (b) $3\frac{1}{3}$ %
(c) 300 % (d) None
- 68 – Five bells ring at intervals 2, 3, 4, 5, 6 seconds respectively. Find how many times in half an hour they will ring together :
- (a) 60 (b) 15
(c) 30 (d) 45
- 69 – The sum of the smallest and greatest number formed by the digits 5, 0, 8, 9, 2.
- (a) 20589 (b) 98520
(c) 101109 (d) 119109
- 70 – Find the value of the expression :
 $2.5 / 0.5 \times 0.1 - 0.05$:
- (a) 0.45 (b) 49.95
(c) 0.25 (d) 100
- 71 – Sum of all prime numbers between 10 and 25 is :
- (a) 72 (b) 83
(c) 66 (d) 70
- 72 – Cost of 6 cans of juice is Rs. 210 then the cost of 4 cans of juice (in Rs):
- (a) 40 (b) 140
(c) 35 (d) 45
- 73 – Find the largest number that will divide 33, 61 and 75 leaving 5 as remainder in each case :
- (a) 7 (b) 14 (c) 28 (d) 56
- 74 – The simplification of :
- $$1 + \frac{1}{10} + \frac{1}{100} + \frac{1}{1000}$$
- (a) 1.001 (b) 1.111
(c) 1.001 (d) 0.1111
- 75 – How many seconds are there in 5 hours :
- (a) 18000 (b) 18500
(c) 1800 (d) 20000
- 76 – One side of a square is 3 cm. What is its perimeter :
- (a) 12 cm (b) 10 cm
(c) 11 cm (d) 13 cm
- 77 – A students secured 30 % marks out of total marks of 250. If the failed by 25 marks, the marks required to pass are :
- (a) 50 (b) 75
(c) 100 (d) 125
- 78 – A train is running at a uniform speed of 75 km/hr. How much time will it take to cover a distance of 350 km :
- (a) 4 hrs (b) 5 hrs
(c) 4 hrs. 30 min (d) 4 hrs. 40 min
- 79 – 10 kg of sugar costs 250 rupees, find the cost of 15 kg of sugar :
- (a) 375 (b) 350
(c) 275 (d) 315
- 80 – Find the supplementary angle of 45° ?
- (a) 125 (b) 135
(c) 45 (d) 35
- 81 – The sum of two angles of a triangle is 130 degrees, find the third angle of the triangle :
- (a) 50 (b) 65
(c) 40 (d) 60
- 82 - 0.045 when expressed as percent is :
- (a) 4.5 % (b) 5 %
(c) 0.45 % (d) 0.045 %
- 83 – Find the sum of all natural numbers lees than 27 which are divisible by 9 ?
- (a) 27 (b) 54
(c) 18 (d) 36
- 84 – $3.2 + 8.395 - 5.45 =$
- (a) 6 (b) 6.135
(c) 6.145 (d) 6.125

Rashtriya Military Schools Common Entrance Test – 2015 Class – VI

85 – If one dozen notebooks costs 252 rupees, find the cost of 10 notebooks.

- (a) 210 (b) 200
(c) 189 (d) 168

86 – Find the average of all first odd natural numbers less than 15 :

- (a) 6 (b) 8
(c) 7 (d) 10

87 – In a school there are 1200 students. If 40 % of them are girls, then find the number of boys in the school :

- (a) 720 (b) 480
(c) 620 (d) 600

88 – 30 % of a certain sum is 900 , find the sum.

- (a) 6000 (b) 2000
(c) 3000 (d) 4000

89 – Karan bought a mobile for 6000 rupees and sold it for 5400 rupees. What is his loss percent?

- (a) 20 % (b) 10 %
(c) 15 % (d) 30 %

90 – Find the greatest 4 – digit number which is exactly divisible by 66 ?

- (a) 9966 (b) 6666
(c) 9933 (d) 9000

91 – Find the square root of 2.

- (a) 1.414 (b) 1.732
(c) 2.23 (d) 2.44

92 – Find the value : $\frac{0.001}{0.01}$:

- (a) 0.01 (b) 0.001
(c) 0.011 (d) 0.1

93 – Find the value $0.01 + 0.1 + 0.02 + 0.003$.

- (a) 13.3 (b) 1.23
(c) 1.33 (d) 0.133

94 – Find the value :

$$0.1 \times 0.01 - 0.01 \times 0.001 :$$

- (a) 0.00099 (b) 0.00199
(c) 0.00001 (d) None

95 – The perimeter of a rectangle is 280 m and the ratio between lengths to the breadth is 5 : 2. Find the area of a rectangle:

- (a) 80000 sq.m (b) 2800 sq.m
(c) 3000 sq. m (d) 4000 sq.m

96 – $\frac{2}{4}$ divides by $\frac{3}{4}$.

- (a) 0.664 (b) 6.666
(c) 0.665 (d) 0.666

97 – Find the value: $7789 \times 48 + 7789 \times 52$.

- (a) 19846372 (b) 407524
(c) 778900 (d) None

98 – Find the place value of 7 in 874213 :

- (a) 70000 (b) 10000
(c) 7 (d) 74213

99 – Rs. 55 =paise

- (a) 5150 (b) 5050
(c) 5500 (d) 5005

100 - 180° angle is called :

- (a) Straight angle (b) Acute angle
(c) Right angle (d) Obtuse angle

Language test (English)

In the following five questions, four choices have been given for each questions. In this one choice has an error. Choose the correct answer and mark it in your answer sheet. If there is no mistake, then mark D as your answer.

101) a. The customer handed over

- b. A hundred rupees note
c. To the shopkeeper d. No error

102.a. If you listen with

- b. the question carefully
c. you will be able to answer them easily
d. No error

103. a. It is the newspaper

- b. that exposes us to the widest range
c. of human experiences and behavior

Rashtriya Military Schools Common Entrance Test – 2015 Class – VI

- d. No error
104. a. A small body breathes about
b. 45 times per minute while
c. a child of about six years breathes about 25 times every minute
d. No error

105. a. He fell from a running train
b. and would have died
c. if he was not admitted in the nearby hospital
d. no error

Direction (106-109): Questions are related to use adverbs. Each questions has four choices. Make correct choice.

- 106.a. The Baby is sleeping still
b. The Baby still is sleeping
c. The baby is still sleeping
d. Still the baby is sleeping

107. a. He spoke well English
b. He spoke English well
c. Well he spoke English
d. He well spoke English

108. a. She is enough intelligent to pass the exam.
b. She enough is intelligent to pass the exam.
c. She is intelligent enough to pass the exam.
d. She is intelligent to pass the exam enough.

- 109.a. You should be punctual always
b. You always should be punctual
c. You should always be punctual
d. Always you should be punctual

The next four questions are related to use of adjectives. Each question has four options. Make the correct answer and fill the OMR sheet accordingly.

110. Ajay is ___ Amit

- a. Taller than b. As tall
c. the tallest d. None

111. Late night television shows are not always suitable ___

- a. of children b. with children
c. the tallest d. for children

112. I made a painting yesterday. It was good but not ___ as yours

- a. as good b. good
c. better d. best

113. My younger sister can't get up in the morning, but at night she is as ___ as daisy

- a. fresh like a b. fresh
c. freshly d. fresh as a

114. Hardly had he arrived ___ it started raining.

- a. before b. when
c. than d. after

115. Farida sings very well and ___ does Salim

- a. even b. to
c. Also d. so

116. The new education policy provides a useful ___ for the planners to remove illiteracy

- a. breakup b. breakthrough
c. break in d. breakaway

117. More than 45% of India's population lives ___ the poverty line

- a. under b. beneath
c. beside d. below

118. The fireman were able to ___ the fire in Church Street.

- a. put off b. put out
c. put away d. off

119. The statement ___ shocked everyone

- a. he died suddenly b. he dies suddenly
c. that he dies suddenly d. he is dying suddenly

120. She ___ from the crowd because of her height and flaming red hair

- a. stood out b. stood off
c. stood up d. stood by

121. This website has helped me a lot to ___ with the latest scientific updates

- a. keep up b. keep on

Rashtriya Military Schools Common Entrance Test – 2015 Class – VI

c. keep out d. keep for

In each question given below, an incomplete statement is given, followed by choices for correctly completing the sentence. Pick out the best one which can complete the sentence meaningfully

122. The employer appeared to be in such good mood that Robin_____

- a. decided to ask for raise in his salary
- b. was scared to talk to him about his leave
- c. felt very guilty for his inadvertent slip
- d. promised him hat he would not slip up again

123. Despite his best efforts to conceal his anger_____

- a. We could understand that he was very happy
- b. he failed to give us an idea of his pain
- c. he succeeded in camouflaging his emotions
- d. people came to know that he was annoyed

124. His appearance is unsmiling but_____

- a. his heart is full of love for others
- b. he looks very serious on most occasions
- c. people are afraid of him
- d. he is uncompromising on matters of task performance

125. Owing to acute power shortage, the people our locality have decided to

- a. use more electricity for illumination
- b. off-switch the electrical appliance while not in use
- c. explore other avenues for utilizing the excess power
- d. use of electricity only when it is required

Some proverbs/idioms are given below with their meanings. Choose the correct meaning of idiom.

126. To cry wolf

- a. To listen eagerly b. To give false alarm
- c. To turn pale d. To keep off starvation

127. A man of straw

- a. An unreasonable person
- b. A very active person
- c. A worthy fellow d. A weak man

128. To bend one's back

- a. To take up agricultural farming
- b. To take a difficult task
- c. To get entangled into unnecessary things
- d. Take interest in technical work

129. To pick holes

- a. To find some reason to quarrel
- b. To destroy something
- c. To criticize someone
- d. To cut some part of the item

The next four questions have jumbles words. Put them in a sequence to form a meaningful sentence.

130. could / accident / few / unhurt / from / escape /the /fire

- a. Few could escape unhurt from the fire accident
- b. From the fire accident few could escape unhurt
- c. The fire accident few could escape unhurt from
- d. Unhurt escape could few from fire accident

131. many/anyone/I/ were/ there/but/not/ know/ did

- a. I did not know anyone but many were there
- b. But there were many I did not know anyone
- c. Many were there but I did not know anyone
- d. But I did not know anyone man were there

132. listen / what /to /parents/your/say

- a. What your parents say listen to
- b. Your parents say listen to what
- c. Say what your parents listen to
- d. Listen to what your parents say

133. horse /has/ the/hurt/ itself

- a. Horse has hurt the itself
- b. Itself has the horse hurt

Rashtriya Military Schools Common Entrance Test – 2015 Class – VI

c. The horse has hurt itself

In the following questions, choose the word which best expresses the meaning of the given word.

134. KINDLE

- | | |
|---------------|---------------|
| a. To ignite | b. desire |
| c. old person | d. creditable |

135. IMMINENT

- | | |
|-------------|-------------|
| a. impure | b. upcoming |
| c. unsteady | d. proud |

136. DISCARD

- | | |
|------------|------------|
| a. reject | b. fact |
| c. perfect | d. hostile |

137. HALLOWED

- | | |
|--------------|-------------|
| a. old | b. sacred |
| c. effective | d. inactive |

In the following questions, find the correctly spelt words.

138.a. Vaccination b. Vacination
c. Vaecination d. Vaccenation

139. a. Velnerable b. Vulnarable
c. Vulnerable d. Valnerable

140.a. Pneumonia b. Phneumonia
c. Nemonia d. Neumonia

141. a. Ommineous b. Omineous
c. Ominous d. Omenous

142.a. Vetarinary b. Vetenary
c. Vetinary d. Veterinary

In the following questions, chose the word which is exact OPPOSITE of the given words.

143. FOREMOST
a. unimportant b. hindmost
c. disposed d. mature

144. PERENNIAL
a. Frequent b. Regular
c. Lasting d. Rare

145. PROTECTS
a. defends b. deprive
c. deserts d. secures

146. MODERN
a. ancient b. recent
c. cast d. latest

Read the following poem carefully and answer the following questions by choosing most appropriate option.

SYMPATHY

I lay in sorrow in deep distress. My grief a proud man heard. His looks were cold, he gave me money. But not a kindly word. My sorrow passed- I paid him back. The money he gave to me. Then stood erect and spoke my thanks and blessed his charity. I lay in want and grief and pain. A poor man passed my way. He bound my head, he gave me bread. He watched me night and day. How shall I pay him back again, for all he did to me? Oh, gold is great but greater far is heavenly sympathy.

147. Which of the following statements is not true?

- The poet repaid his debt to the proud man by thanking him
- The poor man blessed the charity of the poet
- When the poet was in sorrow he was given money
- the poet says he cannot repay the poor man for his sympathy

148. How did the proud man help the poet when he was in deep distress?

- | | |
|-----------------------|-----------------------|
| a. He gave him jewels | b. He took him home |
| c. H gave some money | d. He pitied the poet |

149. Which word in the poem means “ Giving money to a person who is in need”?

- | | |
|-------------|-------------|
| a. Charity | b. sympathy |
| c. kindness | d. distress |

150. How did the poor man take care of the poet?

- The poor man gave him some money and food
- The poor man gave gold and kind words
- The poor man gave food to the poet and took care of him day and night
- He took the poet and bound his heads which